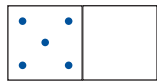
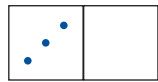




1 Immer **10**, ergänze.



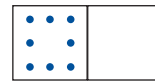
5 + ____



____ + ____



____ + ____








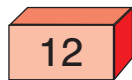
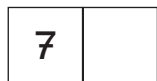



____ + ____

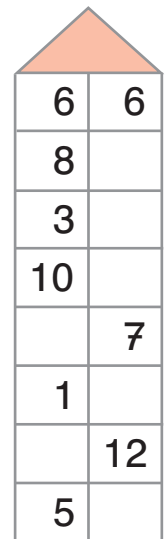
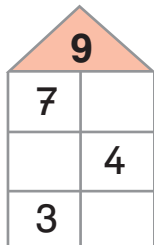
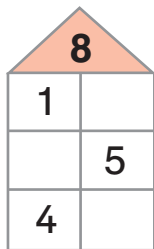


____ + ____

2 Trage die fehlenden Zahlen ein.



3 Fülle die Zahlenhäuser aus.



4 Ergänze die Rechenmauern.

