




1 Wie heißen die Zahlen?

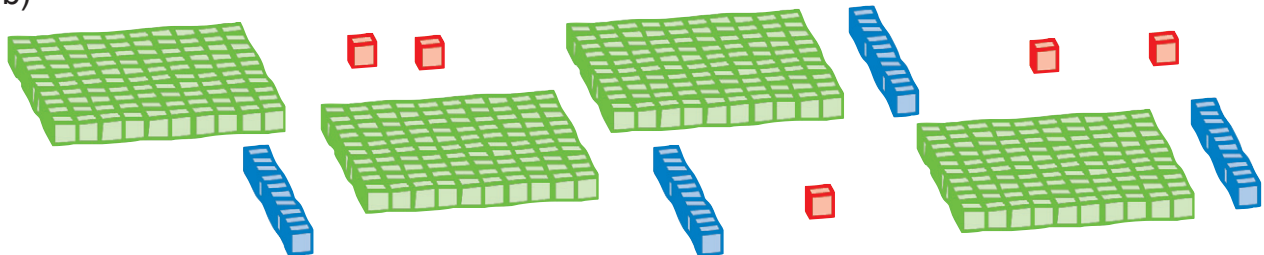
a)



H	Z	E
3	5	3

Zahl: 353

b)



H	Z	E
4	4	5


Zahl: 445

2 Stelle nun selber die Zahlen dar.

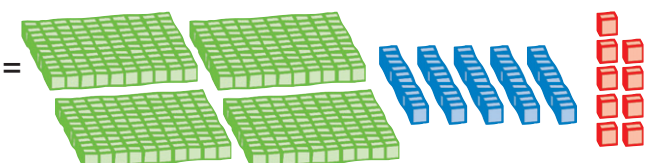
a) 134 =



b) 275 =



c) 459 =



3 Ergänze die Tabelle.

Zahl	H + Z + E	Zerlegung
245	2 H + 4 Z + 5 E	200 + 40 + 5
584	5 H + 8 Z + 4 E	500 + 80 + 4
429	4 H + 2 Z + 9 E	400 + 20 + 9
190	1 H + 9 Z + 0 E	100 + 90
602	6 H + 0 Z + 2 E	600 + 2
969	9 H + 6 Z + 9 E	900 + 60 + 9
301	3 H + 0 Z + 1 E	300 + 1