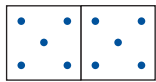
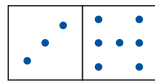




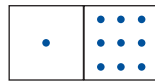
1 Immer **10**, ergänze.



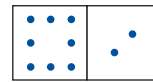
$$5 + 5$$



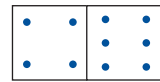
$$3 + 7$$



$$1 + 9$$





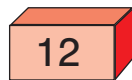
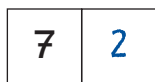



$$8 + 2$$

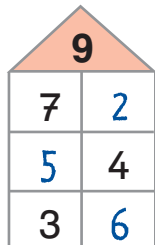
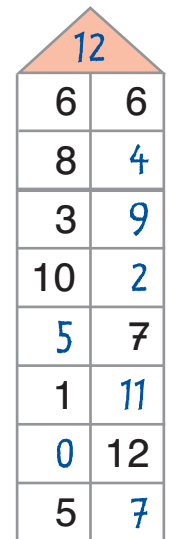
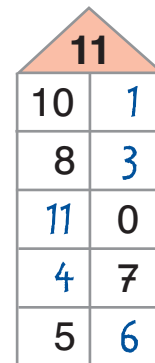
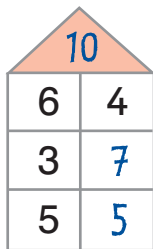
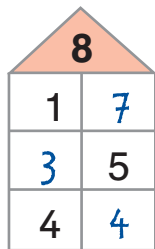


$$4 + 6$$

2 Trage die fehlenden Zahlen ein.



3 Fülle die Zahlenhäuser aus.



4 Ergänze die Rechenmauern.

